



Advanced Kids Series

Second Terminal Evaluation 2077



Subject : Maths

Nursery

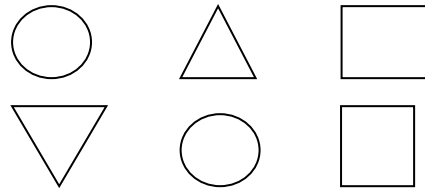
Name :

Roll No.

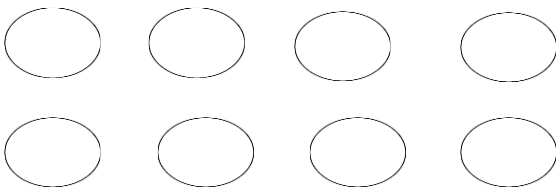
1. Tick the correct number of the following pictures.




5	6	7
---	---	---



5	6	7
---	---	---



7	8	9
---	---	---



8	9	10
---	---	----

2. Draw circle (○) equal to the number.

6

--

7

--

8

--

9

--

10


--


3. Draw 10 crosses (×) in the boxes.






4. Write the missing number that comes after






5. Write the numbers 1 to 15.

1			
		10	

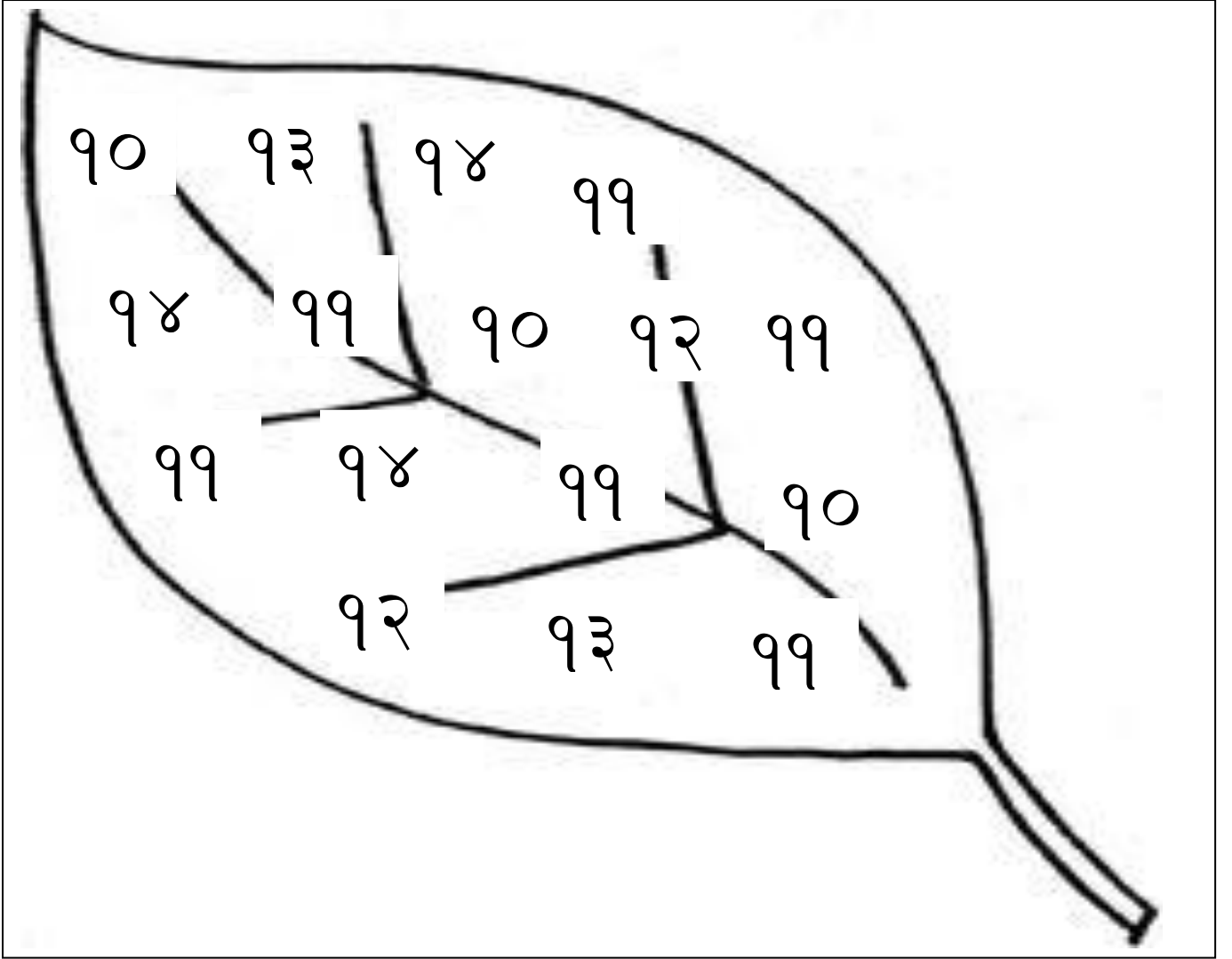


6. Circle the same number and copy




11	→	11	12	13	14	15	
12	→	14	12	13	15	16	
13	→	15	16	13	18	19	
14	→	17	15	16	14	13	
15	→	15	16	17	19	20	

७. अङ्क ११ मा मात्र गोलो घेरा (○) लगाउनुहोस् ।



८. सबै कोठामा रङ भर्नुहोस् ।




१०
९
८
७
६
५
४
३
२
१

५
४
३
२
१


१० + ५ =

९. तल दिइएका अङ्क भन्दा अगाडि आउने अङ्कहरू लेख्नुहोस् ।



2 4 6 8 10 12 14 16 18 20

१०. जोडा मिलाउनुहोस् र लेख्नुहोस् ।



१०

१५

११

१४

१२

१०

१३

११

१४

१२

१५

१३

१०	१०	१०

